

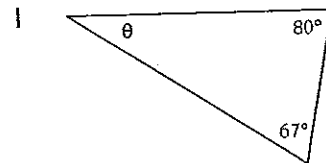
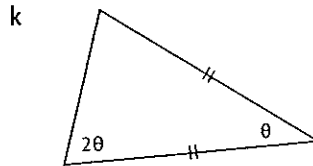
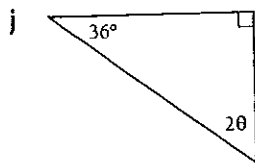
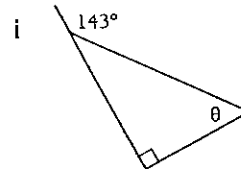
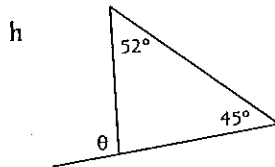
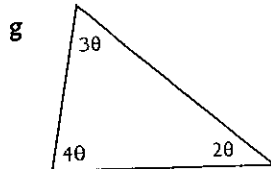
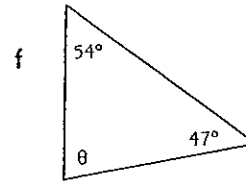
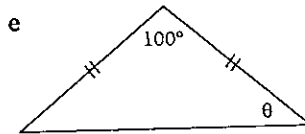
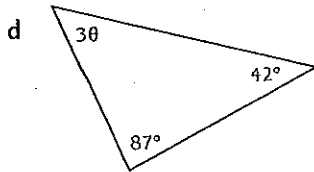
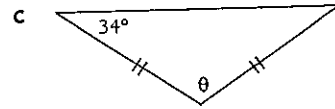
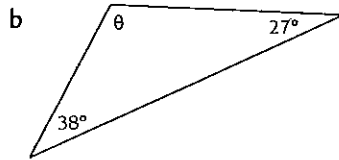
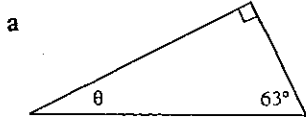
1:12 | Triangles and Quadrilaterals

Name: _____

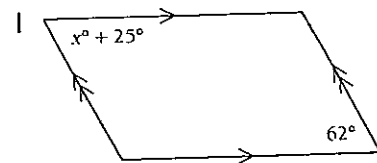
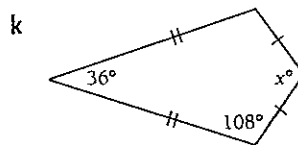
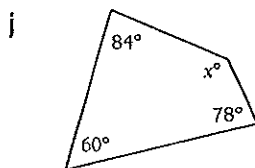
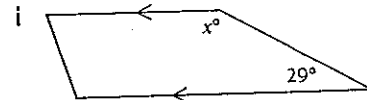
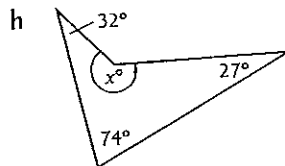
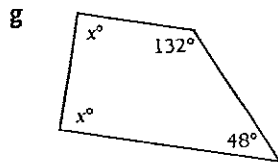
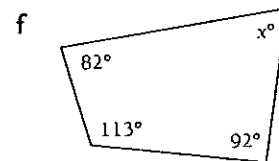
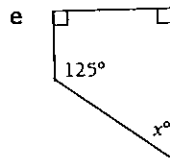
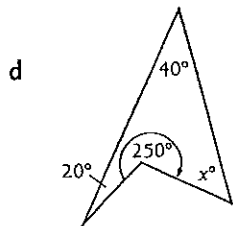
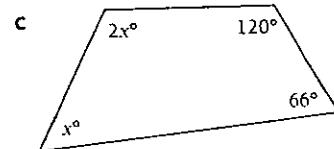
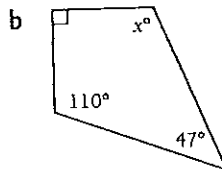
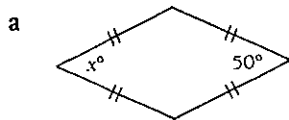
Class: _____

Exercise

1 Find the size of angle θ .



2 Find the value of x .



1:12 Triangles and Quadrilaterals

1 a	27°	b	115°	c	112°	d	17°	e	40°	f	79°	g	20°	h	97°
i	53°	j	27°	k	36°	l	33°								
2 a	50	b	113	c	58	d	50	e	55	f	73	g	90	h	227
i	151	j	138	k	108	l	37								