

CHAPTER 8

Reasoning in geometry

Some basic ideas in geometry

QUESTION 1 Complete the following sentences.

- An equilateral triangle is a triangle in which _____ sides are equal.
- An isosceles triangle is a triangle in which _____ sides are equal.
- An scalene triangle is a triangle in which _____ sides are equal.
- An acute-angled triangle has _____ acute angle(s).
- An obtuse-angled triangle has _____ obtuse angle(s).
- A right-angled triangle has _____ right angle(s).

QUESTION 2 Complete the following statements.

- The interior angles of an equilateral triangle are _____.
- The base angles of an isosceles triangle are _____.
- The angle sum of a triangle is _____.
- A triangle has all angles of equal size. The size of each angle is _____.
- An exterior angle of a triangle is always equal to the sum of _____ angles.
- The angle sum of a quadrilateral is _____.

QUESTION 3 Complete the following.

- A quadrilateral is a _____ plane figure.
- A polygon is a closed figure with _____ sides.
- A trapezium is a quadrilateral with one pair of opposite sides _____.
- A parallelogram is a quadrilateral with both pairs of opposite sides _____.
- A rhombus is a parallelogram in which all sides are _____.
- A rectangle is a parallelogram in which each angle is a _____.

QUESTION 4 Complete the following sentences.

- A square is a quadrilateral with all sides _____ and each angle is _____.
- A kite is a quadrilateral with two pairs of adjacent sides _____ and no sides _____.
- The angle sum of a kite is _____.
- Opposite angles of a parallelogram are _____.
- Each angle of a rectangle is equal to _____.

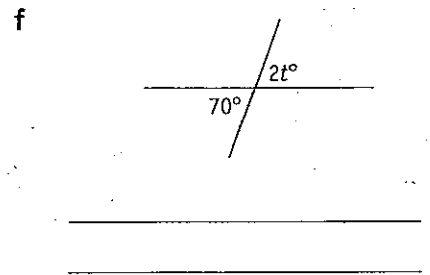
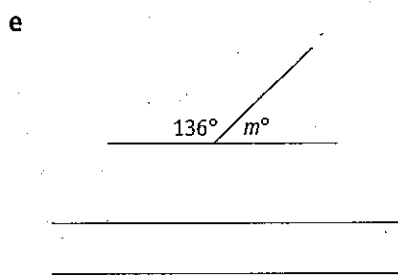
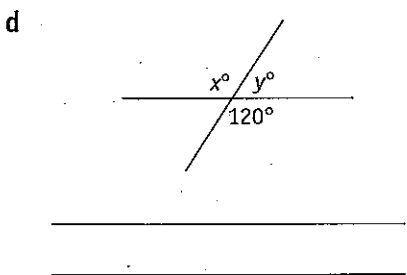
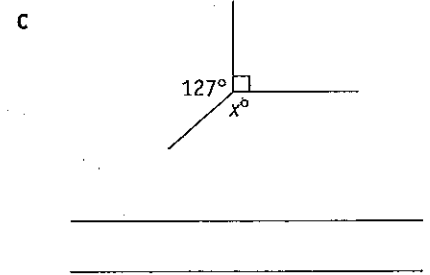
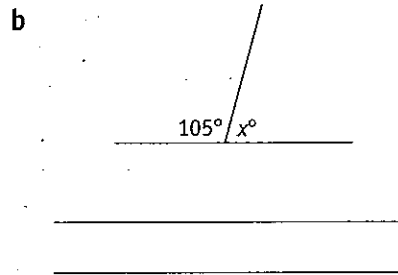
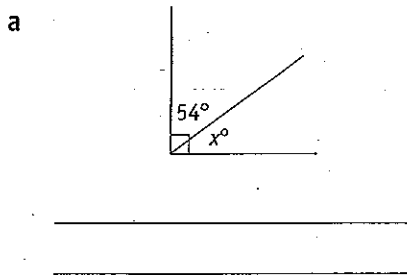
QUESTION 5 Complete the following statements.

- Vertically opposite angles are _____.
- Alternate angles are _____.
- Corresponding angles are _____.
- Co-interior angles add up to _____.

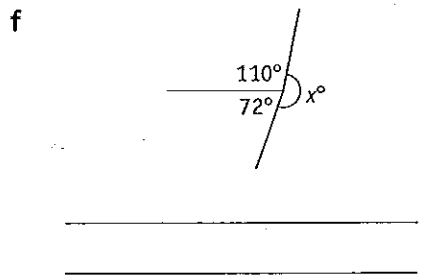
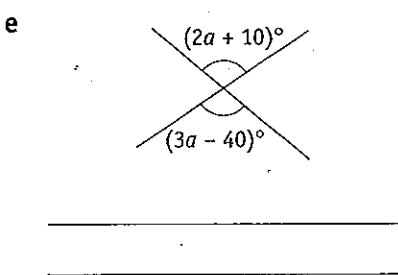
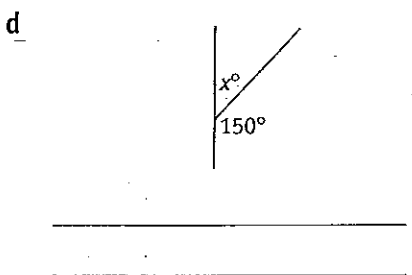
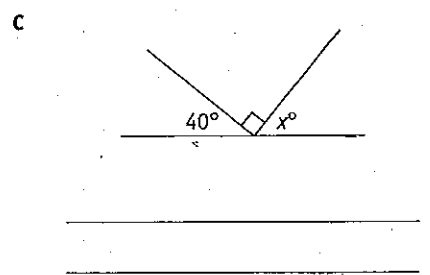
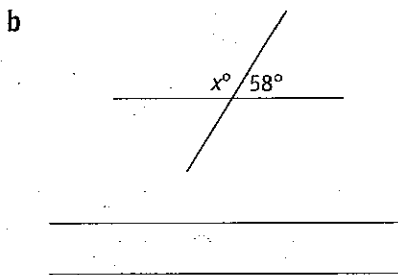
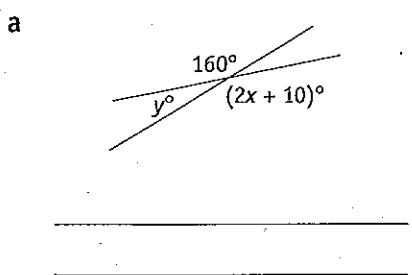


Complementary, supplementary and vertically opposite angles

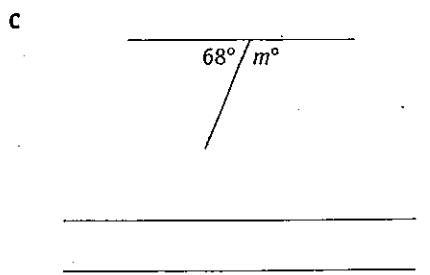
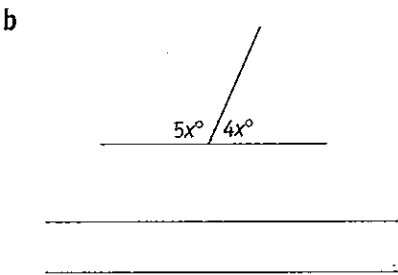
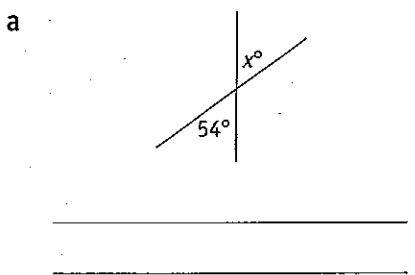
QUESTION 1 Find the value of the pronumeral in each of the following.



QUESTION 2 Find the value of the pronumeral and give reasons to justify your answer.



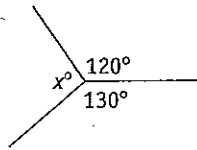
QUESTION 3 Find the value of the pronumeral, giving reasons.



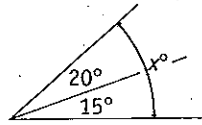
Angles and the value of pronumerals

QUESTION 1 Find the value of the pronumeral in each of the following.

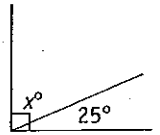
a



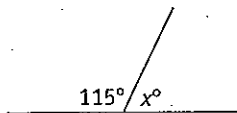
b



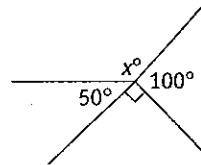
c



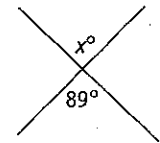
d



e

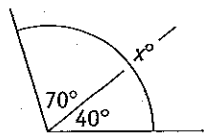


f

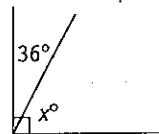


QUESTION 2 Find the value of the pronumeral and give reasons for your answer.

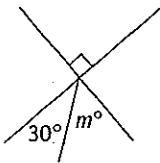
a



b

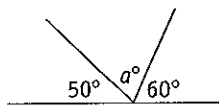


c

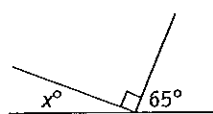


QUESTION 3 Find the value of the pronumeral, giving reasons.

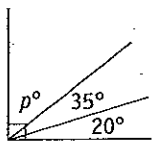
a



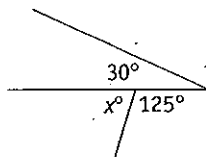
b



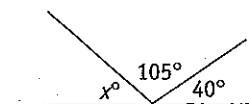
c



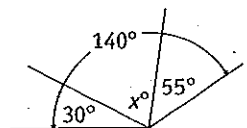
d



e



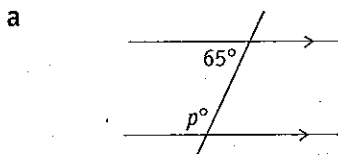
f

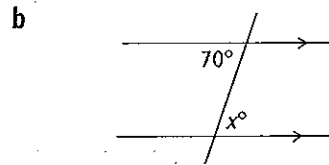


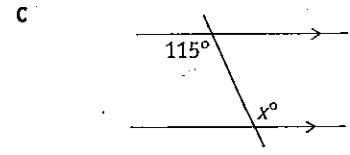


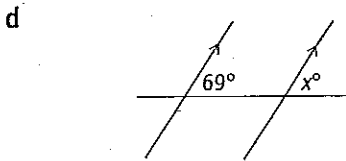
Parallel lines and angles

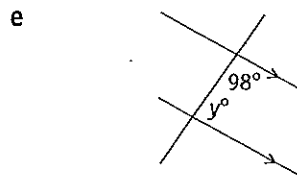
QUESTION 1 Find the value of the pronumeral in each of the following.

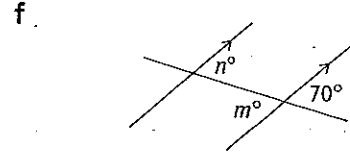




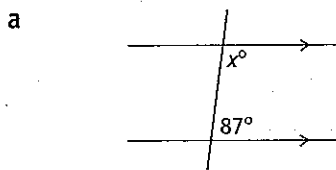


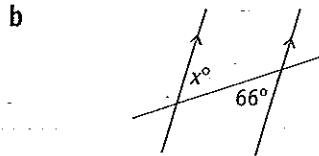


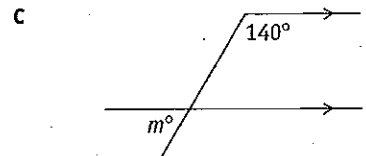




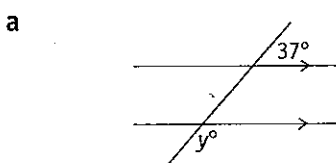
QUESTION 2 Find the value of the pronumeral, giving reasons.

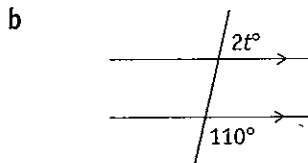


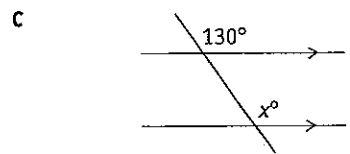


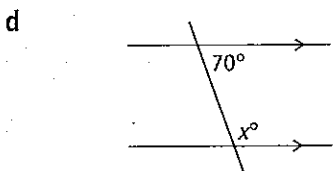


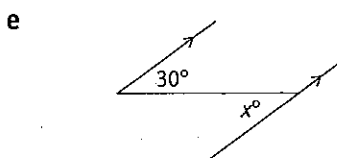
QUESTION 3 Find the value of the pronumeral, giving reasons.

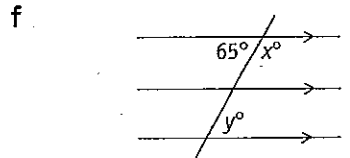








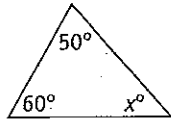




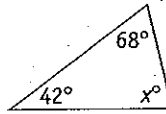
Triangles and the value of pronumerals

QUESTION 1 Find the value of the pronumeral.

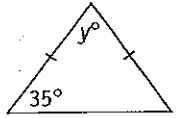
a



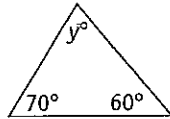
b



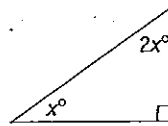
c



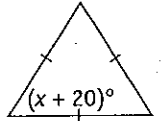
d



e

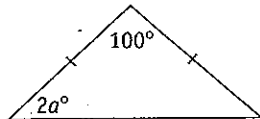


f

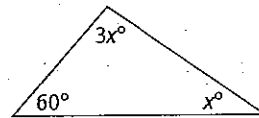


QUESTION 2 Find the value of the pronumeral.

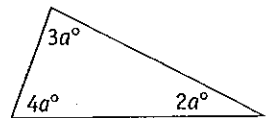
a



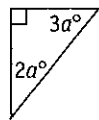
b



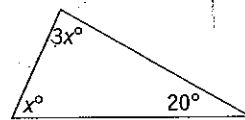
c



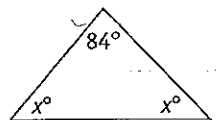
d



e

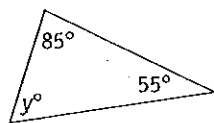


f

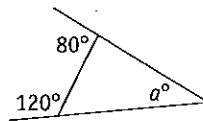


QUESTION 3 Find the value of the pronumeral.

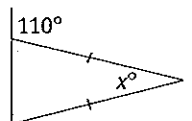
a



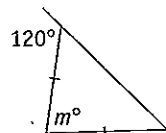
b



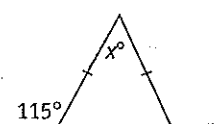
c



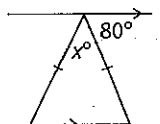
d



e



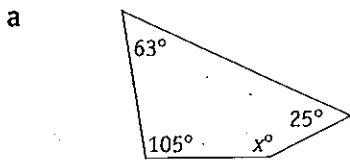
f

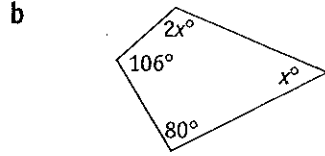


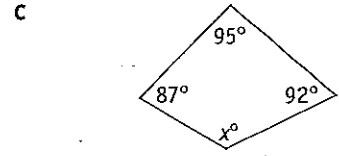


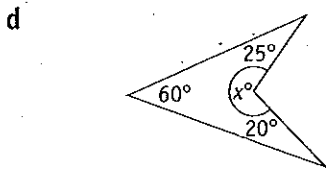
Quadrilaterals and the value of pronumerals

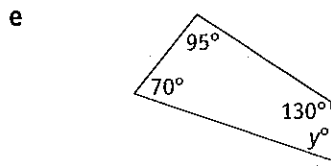
QUESTION 1 Find the value of the pronumeral.

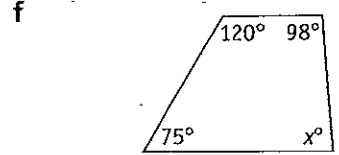




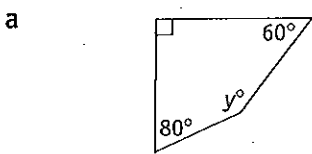


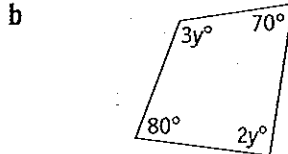


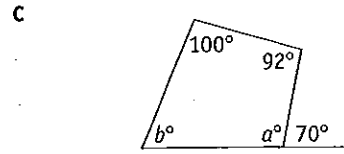




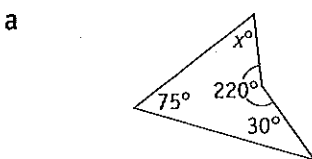
QUESTION 2 Find the value of the pronumeral.

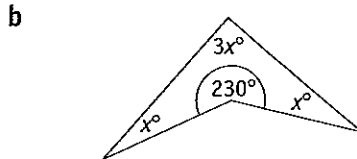


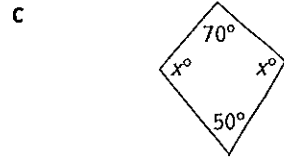


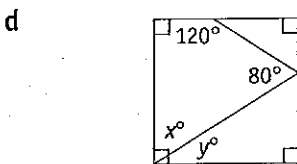


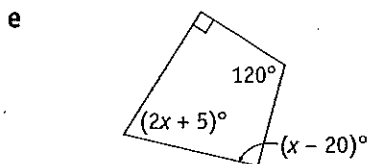
QUESTION 3 Find the value of the pronumeral.

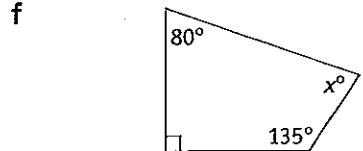






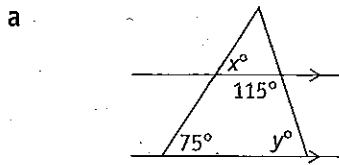


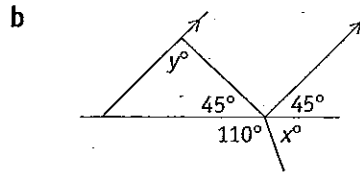


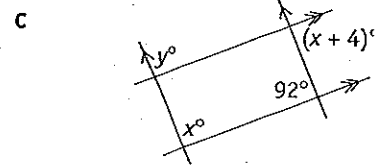


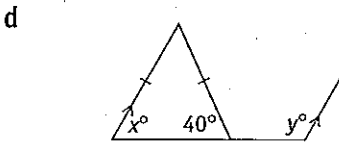
Miscellaneous questions

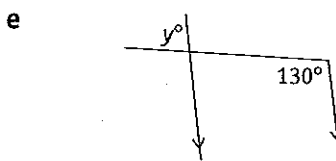
QUESTION 1 Find the value of the pronumeral in each of the following.

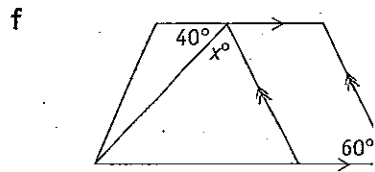




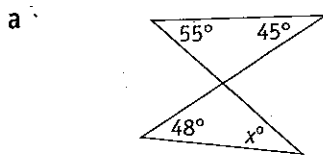


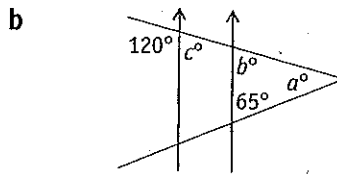


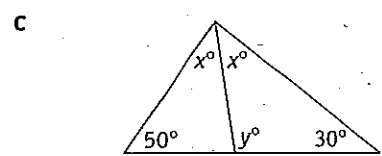




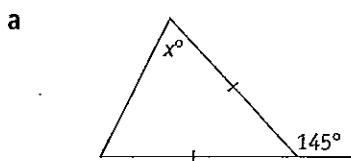
QUESTION 2 Find the value of the pronumeral in each of the following.

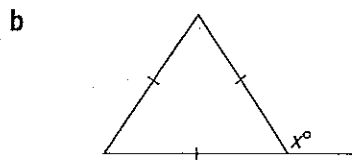


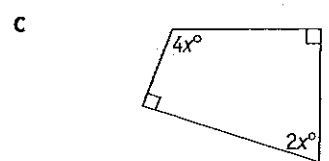


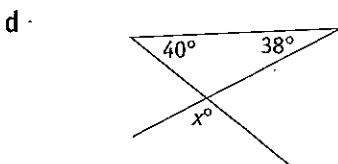


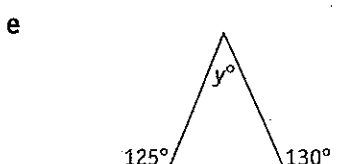
QUESTION 3 Find the value of the pronumeral in each of the following.

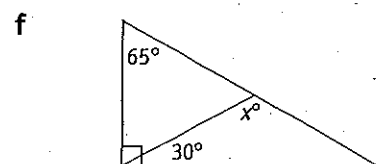








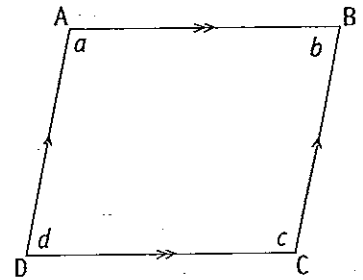




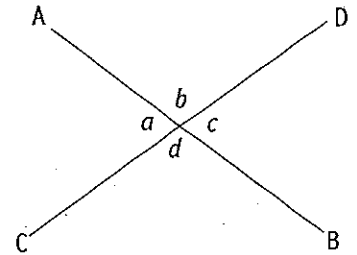


Deductive geometry

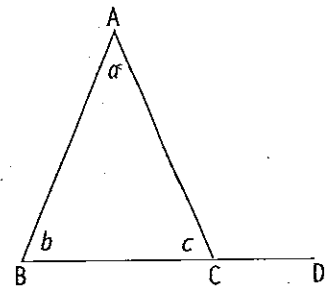
QUESTION 1 For the parallelogram shown, prove that $a + b + c + d = 360^\circ$



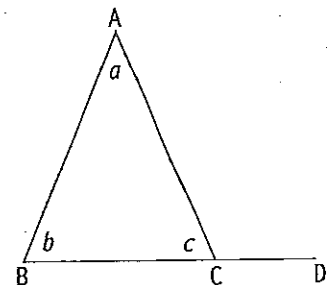
QUESTION 2 AB and CD are two intersecting lines.
Prove that the vertically opposite angles are equal.



QUESTION 3 In the triangle ABC, prove that the exterior angle ACD is equal to the sum of the opposite interior angles a° and b° .
In other words, show that $\angle ACD = a^\circ + b^\circ$



QUESTION 4 Prove that the angle sum of a triangle is equal to 180° .
In other words, show that $a^\circ + b^\circ + c^\circ = 180^\circ$



Reasoning in geometry

Problem solving and geometry

- 1 Two angles of a triangle are 55° and 45° . Find the third angle.

- 2 Three angles of a quadrilateral are 80° , 60° and 140° . Find the fourth angle.

- 3 If one of the base angles of an isosceles triangle is 72° , find the size of the vertical angle.

- 4 If the vertical angle of an isosceles triangle is 82° , find the size of each of the base angles.

- 5 If a triangle has all three sides equal, find the size of each angle.

- 6 In a right-angled triangle the two shorter sides are equal. What is the size of each acute angle?

- 7 In a right-angled triangle one of the angles is 50° . Find the other acute angle.

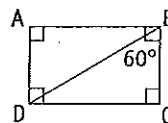
- 8 In a rhombus one angle is 120° . Find the size of the other angles.

- 9 The angles of a triangle are x° , $2x^\circ$ and $3x^\circ$. Find the size of each angle.

- 10 In a parallelogram one of the angles is 65° . Find the size of all other angles.

- 11 In a right-angled triangle one acute angle is four times the size of the other acute angle. What is the size of each angle?

- 12 ABCD is a rectangle. If $\angle DBC = 60^\circ$, find $\angle BDC$.



Reasoning in geometry

TOPIC TEST

PART A

- Instructions**
- This part consists of 15 multiple choice questions
 - Fill in only ONE CIRCLE for each question
 - Each question is worth 1 mark
 - Calculators may be used

Time allowed: 15 minutes

Total marks = 15

	Marks
1 The number of sides equal in an equilateral triangle are (A) none (B) 2 (C) 3 (D) none of these	1
2 The number of sides equal in an isosceles triangle are (A) none (B) 2 (C) 3 (D) none of these	1
3 The number of sides equal in a scalene triangle are (A) none (B) 2 (C) 3 (D) none of these	1
4 The angle sum of a triangle is always equal to (A) 90° (B) 180° (C) 270° (D) 360°	1
5 The angle sum of a quadrilateral is always equal to (A) 90° (B) 180° (C) 270° (D) 360°	1
6 The number of acute angles in an acute-angled triangle: (A) 1 (B) 2 (C) 3 (D) none of these	1
7 The number of obtuse angles in an obtuse-angled triangle: (A) 1 (B) 2 (C) 3 (D) none of these	1
8 The number of right angles in a right-angled triangle: (A) 1 (B) 2 (C) 3 (D) none of these	1
9 If two angles of a triangle are complementary, then the third angle is (A) acute (B) right-angle (C) obtuse (D) none of these	1
10 In any right-angled triangle, the other two angles are both (A) acute (B) right angles (C) obtuse (D) none of these	1

- 11** In a triangle, the number of right angles can be
Ⓐ 1 Ⓑ 2 Ⓒ 3 Ⓓ none of these
- 12** In a triangle, if one angle is 38° and the other is 52° , the triangle is called
Ⓐ scalene Ⓑ acute-angled Ⓒ right-angled Ⓓ obtuse-angled
- 13** The minimum number of sides in a polygon:
Ⓐ 2 Ⓑ 3 Ⓒ 4 Ⓓ 5
- 14** The number of sides in a quadrilateral:
Ⓐ 2 Ⓑ 3 Ⓒ 4 Ⓓ 5
- 15** The sum of the exterior angles of any polygon is equal to
Ⓐ 90° Ⓑ 180° Ⓒ 270° Ⓓ 360°

Total marks achieved for PART A

Reasoning in geometry

TOPIC TEST

PART B

- Instructions**
- This part consists of 15 questions
 - Each question is worth 1 mark
 - Write answers in the 'Answers only' column

Time allowed: 15 minutes

Total marks = 15

Questions			Answers only	Marks			
Name the following angles.							
1		2		3		<input type="text"/>	<input type="text"/>
Find the value of the pronumeral.							
4		5		6		<input type="text"/>	<input type="text"/>
7		8		9		<input type="text"/>	<input type="text"/>
10		11		12		<input type="text"/>	<input type="text"/>
13		14		15		<input type="text"/>	<input type="text"/>

Total marks achieved for PART B

15

TOPIC TEST

- Instructions**
- This part consists of 4 questions
 - Each question is worth 5 marks
 - Show all necessary working

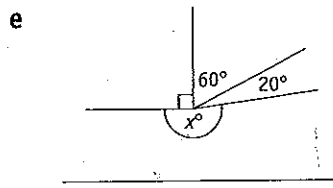
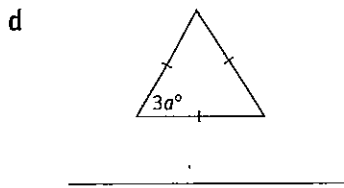
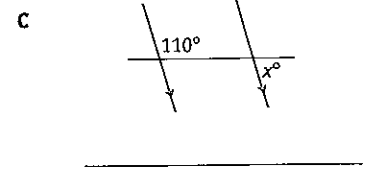
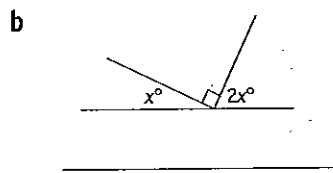
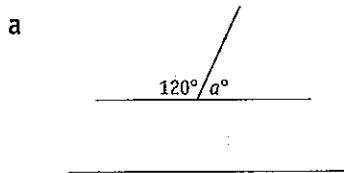
Time allowed: 20 minutes

Total marks = 20

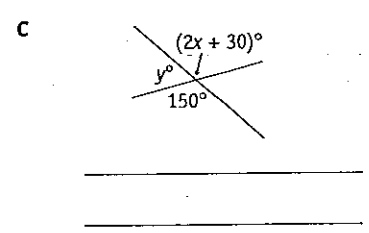
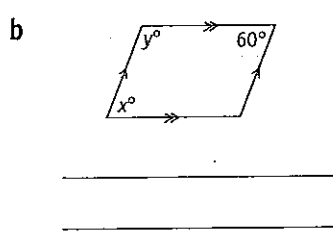
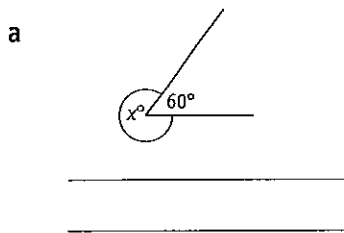
1 Complete the following statements.

- The base angles of an isosceles triangle are _____.
- The size of each interior angle of an equilateral triangle is _____.
- A right angle is equal to _____.
- A quadrilateral is a _____ sided plane figure.
- A trapezium is a quadrilateral in which one pair of opposite sides are _____.

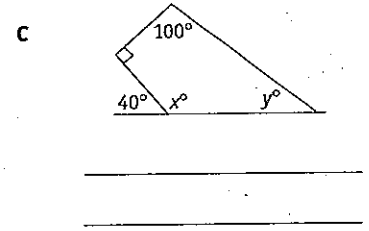
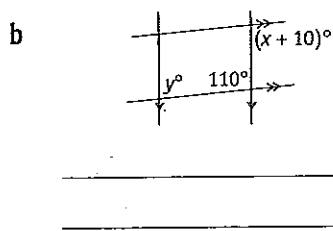
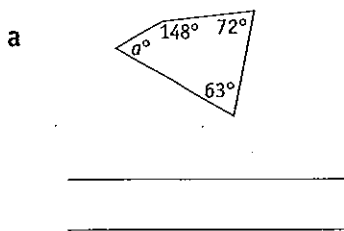
2 Find the value of the pronumeral in each of the following.



3 Find the value of each pronumeral, giving reasons.



4 Find the value of each pronumeral, giving reasons.



Total marks achieved for PART C