

NUMERACY

CALCULATOR ALLOWED



YEAR
9
2010



132_142 9N

0964694 3

FIRST NAME: _____

LAST NAME: _____

Date of Birth: ____/____/____

GENDER: _____

SOUTH SYDNEY HIGH SCHOOL

530_8545



5308545 4

STUDENT TO COMPLETE

Please print your first name and last name below. Write in capital letters.

FIRST NAME

LAST NAME

NOTE TO TEACHER – RECORDING STUDENT PARTICIPATION AND SPECIAL PROVISIONS

Please ensure your School NAPLAN coordinator has provided you with an **Assessment Roll** for this test. The Assessment Roll must be printed from the School Online Assessment Registration (SOAR) and used to record student participation and special provisions. At the end of the test session, the completed Assessment Roll must be handed to the NAPLAN coordinator so the data can be entered into SOAR.

Special Provisions

Tick the appropriate box on the Assessment Roll to identify the special provisions provided for the student for this test and to identify if the student is enrolled in a Support Class.

Student participation

Tick the appropriate box on the Assessment Roll if the student was absent, exempt or withdrawn from this test.

Books for students in these categories MUST NOT BE RETURNED for processing.

0:40

SESSION 1

Time available for students to
complete test: 40 minutes

Use 2B pencil
only



YEAR 9 NUMERACY

PRACTICE QUESTIONS

P1

50, 100, 150, 200, 250, ?

Shade one
bubble.

Which number comes next in this sequence?

251

260

300

350

P2

Use numbers to write one dollar and seventy-five cents.

Write your answer
in the box.

\$

P3

268 cents equals

Write your answer
in the boxes.

dollars and

cents.

9499931

9499931




What number is missing from this number sentence?

$$5 \times \boxed{?} + 15 = 85$$

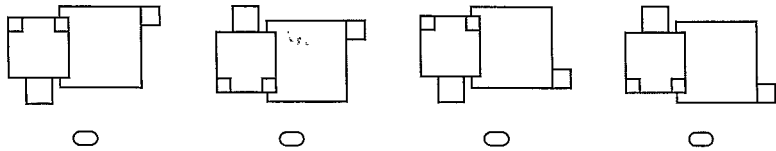
Shade one bubble.

- 2 10 14 20

Tracey drew this design for a wooden toy.



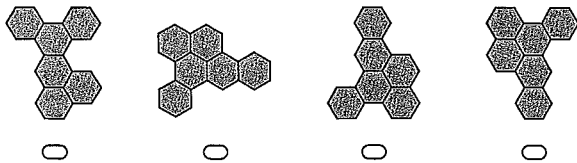
Which picture shows a top view of Tracey's design?



Joe made this design by joining six tiles together. The tiles are grey on all faces.



Which of these could **not** be Joe's design?

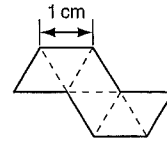


Which expression is always equal to $2x + 5 + 3x + 4$?

- $7x + 7$ $14x$ $5x + 9$ $8x + 6$

This shape is made with 6 equilateral triangles.


Shade one bubble.



What is the perimeter of the shape?

- 6 cm 8 cm 10 cm 18 cm

6




Which of these is the best estimate for the mass of this hammer?

- 30 grams 300 grams 30 kilograms 300 kilograms

7

Lyn enlarged a copy of picture A and labelled it picture B.



The lengths in picture B are 3 times the lengths in picture A.

How high is the marked height in picture A?

- 0.9 cm 1.11 cm 1.35 cm 8.1 cm

9499931



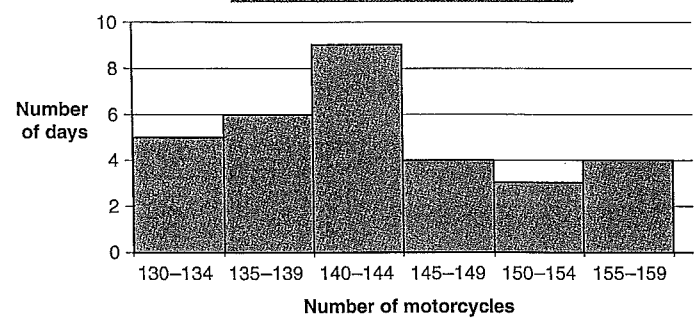
In Sandra's school there are 60 teachers and 900 students.
What is the ratio of teachers to students?



- 1:15
- 1:16
- 15:16
- 30:2

This graph shows data on how many motorcycles a factory produced in one month.

Motorcycles produced in one month



On how many days did the factory produce less than 140 motorcycles?

- 5
- 6
- 9
- 11

Nathan made this pattern of shapes using large and small circles.

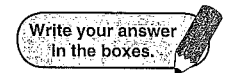
Shape			
Large circles	1	2	3
Small circles	4	6	8

He continues the pattern.

How many small circles are in Nathan's 14th shape?

- 12
- 20
- 28
- 30

11 A prize of \$5934 is shared equally among 15 friends.
How much does each person get in dollars and cents?



dollars and cents

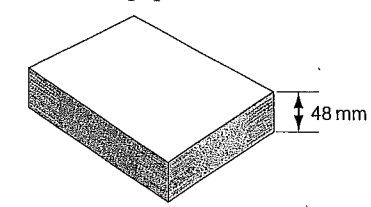
12 The top speed of this wombat is 660 metres per minute.



What is the top speed of the wombat in metres per second?

- 11
- 66
- 110
- 600

13 This stack of paper is 48 mm thick.

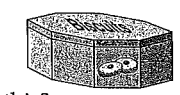


Each sheet of paper in the stack is 0.09 mm thick.

Which value is closest to the number of sheets in the stack?

- 432
- 480
- 500
- 533

14 A biscuit tin is in the shape of a regular octagonal prism.
The lid is taken off and rotated until it is able to fit back on the tin.



What is the smallest number of degrees of rotation that will achieve this?

- 22.5°
- 45°
- 60°
- 90°

9499931

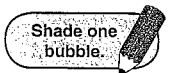


Kiri has to find the value of this expression **without** a calculator.

$$20 - 12 \times \sqrt{9.5 + 6.5}$$

Which calculation should she do first?

- $20 - 12$
 $12 \div 9.5$
 $\sqrt{9.5}$
 $9.5 + 6.5$



This block has 6 faces which are numbered from 1 to 6. Vicky throws the block 1000 times to test it and records the outcomes.

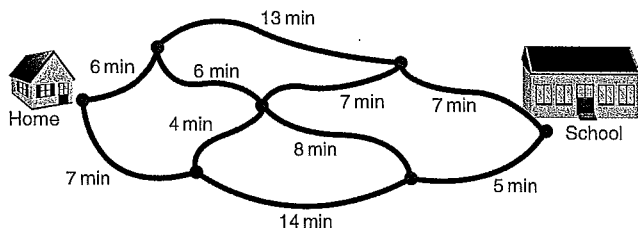


Number on top face	1	2	3	4	5	6
Frequency	150	360	146	144	68	132

What is the probability of rolling a 2 based on Vicky's results?

- $\frac{1}{6}$
 $\frac{1}{60}$
 $\frac{9}{25}$
 $\frac{3}{500}$

Brian's mother drives him to school. The diagram shows the routes they can take and the travel times.



What is the **shortest** time for Brian to get to school?

- 23 minutes
 24 minutes
 25 minutes
 26 minutes

18

An electrician calculates the price of a job using a service fee and an amount **per hour**.

This table shows some of the job prices.

Hours	2	4	5	6
Job price	\$160	\$252	\$298	\$344





How are the job prices calculated?

- \$80 service fee + \$40 per hour
 \$80 service fee + \$80 per hour
 \$68 service fee + \$92 per hour
 \$68 service fee + \$46 per hour



19

Jack is checking the price of four detergents.

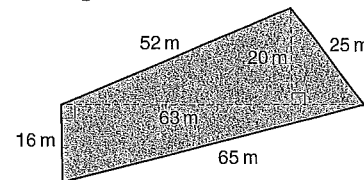
			
Hex detergent \$7.85, 1100 mL	Sun detergent \$5.25, 750 mL	Green detergent \$4.50, 600 mL	Lemon detergent \$4.25, 500 mL

Which detergent is the cheapest per litre?

- Hex
 Sun
 Green
 Lemon

20

The diagram shows some measurements of a nature reserve.



What is the area of the nature reserve?

- 158 m²
 936 m²
 1134 m²
 1170 m²

9499931





Mount St. Helens is a volcano that erupted in 1980. Before it erupted, it was 2950 m high. After the eruption, it was 2550 m high.

Shade one bubble.



Mount St. Helens before eruption

Mount St. Helens after eruption

By what percentage of its original height did it decrease after the eruption?

- 13.6%
- 15.7%
- 86.4%
- 115%

As Mike skydives, the air temperature increases by the same amount every 100 metres.

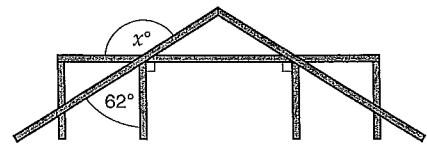
At a height of 5000 metres the temperature is -18°C .
At ground level the temperature is 22°C .

What is the air temperature at a height of 2000 metres?

- 4°C
- 6°C
- 8°C
- 16°C

The diagram shows part of a roof structure.

Write your answer in the box.

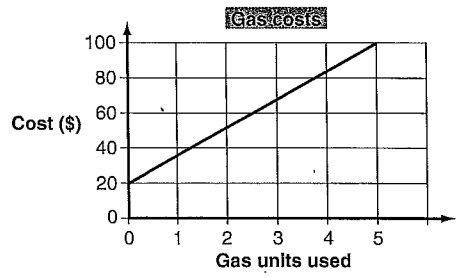


What is the value of x ?



24 This graph shows how to find the cost of the gas used in Jim's house.

Shade one bubble.



The expression to calculate the cost is

- $20 + (5 \times \text{gas units used})$
- $20 + (16 \times \text{gas units used})$
- $20 + (20 \times \text{gas units used})$
- $20 + (100 \times \text{gas units used})$

25 Greg sold one hot dog every 2 minutes at a festival.

At this rate, how many minutes would it take to sell \$110 worth of hot dogs?



- 25 minutes
- 50 minutes
- 55 minutes
- 100 minutes


26 Jamie surveyed all the Year 7 students at his school about their favourite sport.

Favourite sport	Number of students
Basketball	85
Cricket	35
Football	55
Netball	75

Which sport did 3 out of every 10 Year 7 students choose as their favourite?

- Basketball
- Cricket
- Football
- Netball


9499931






Dan has started to cover a rectangular floor with tiles. The tiles are twice as long as they are wide. The floor is $10\frac{1}{2}$ tiles wide and $18\frac{1}{2}$ tiles long.

Write your answer in the box



Using this pattern, what is the total number of tiles Dan will use to cover the floor?

A racing car used 255 litres of fuel to complete a 340 km race.



On average, how many litres of fuel did the car use every 100 km?

 litres per 100 km

Amy recorded a set of scores for a netball team.

17, 22, 26, 26, 30, 30, 30, 30, 32, 39, 41, 42

She then included an extra score of 15.


Which of these values would increase?

Shade one bubble

mean mode median range



30



Write your answer in the box


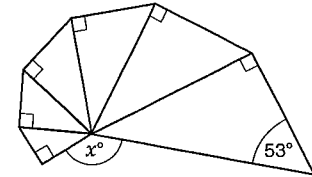
When this car moves forward by 180 cm, each wheel does one full turn.

What is the diameter of the wheels to the nearest centimetre?

 cm

31

A model of how a shell grows can be made using enlarged copies of the same triangle. Here is a model.



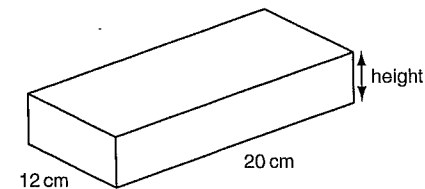
What is the value of x ?

32

The surface area of a box is given by the rule:

$$\text{total surface area} = 2 \times [(\text{width} \times \text{height}) + (\text{width} \times \text{length}) + (\text{height} \times \text{length})]$$

The box shown has a total surface area of 768 square centimetres.



What is the height of the box? centimetres

STOP – END OF TEST

