

1. (i) On the same set of axes, sketch the graphs of  $y = x$  and  $y = -\frac{1}{x}$ .

- (ii) By addition of ordinates, sketch the graph of  $y = x - \frac{1}{x}$ .

(Sketch all graphs on the above set of axes).

2. Sketch the following by addition of ordinates:

(a)  $y = 2x + \frac{1}{x}$

(b)  $y = \frac{3}{x} - 2x$

(c)  $y = x^2 + \frac{1}{x}$

(d)  $y = x^2 - \frac{1}{x}$

---

(e)  $y = 2^x + 2^{-x}$

(f)  $y = 2^x - 2^{-x}$

---

3. (a) Prove that  $y = \sqrt{x+1} + \sqrt{1-x}$  is an even function.

(b) Find the domain of this function.

(c) Find the value of  $y$  when  $x = 0$ .

(d) Use the information gleaned in parts (a), (b) and (c), and the method of addition of ordinates to sketch this function, stating also its range.

4. Sketch the following graphs of reciprocal functions, stating the domain and range :

(a)  $y = \operatorname{cosec} x$ ,  $0 \leq x \leq 360^\circ$

(b)  $y = \cot x$ ,  $0 \leq x \leq 360^\circ$

(c)  $y = \frac{2}{x^2 + 1}$

(d)  $y = \frac{2}{x^2 - 1}$

---

(e)  $y = \frac{1}{x^3 - x}$

(f)  $y = \frac{1}{x^2}$

(g)  $y = \frac{1}{(x-2)^2}$

(h)  $y = \frac{1}{\sqrt{4-x^2}}$

5. Sketch the following rational functions:

$$(a) y = \frac{1}{x+1}$$

$$(b) y = \frac{x}{x+1}$$

$$(c) y = \frac{2}{(x-3)(x+2)}$$

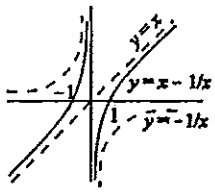
$$(d) y = \frac{1}{x^2+x}$$

$$(e) y = \frac{x+1}{(x-1)(x+2)}$$

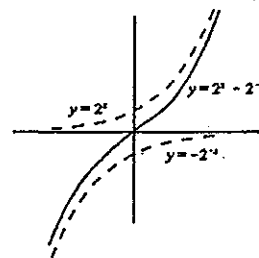
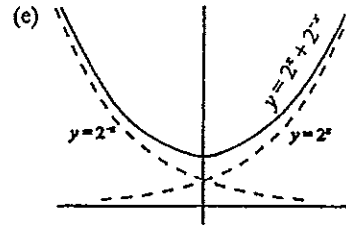
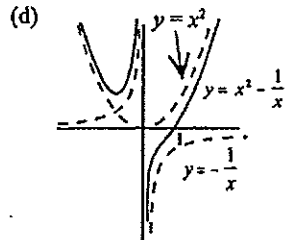
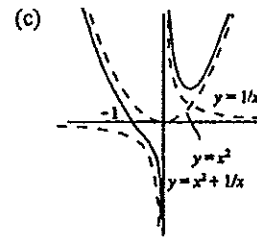
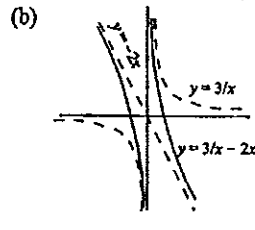
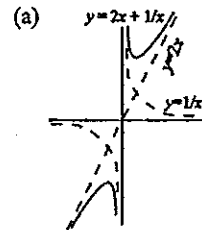
$$(f) y = \frac{x^2-4}{x^2+2x-3}$$

**ANSWERS:**

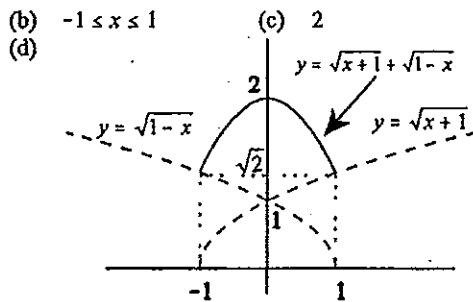
1.



2.

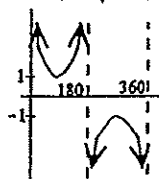


3. (b)  $-1 \leq x \leq 1$



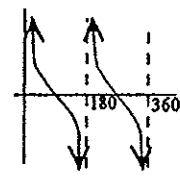
Range:  $\sqrt{2} \leq y \leq 2$

4. (a)



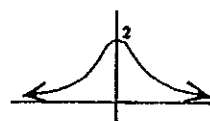
D:  $0 < x < 360, x \neq 180$   
R:  $y \leq -1, y \geq 1$

(b)



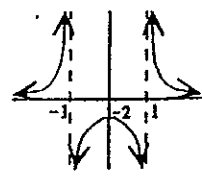
D:  $0 < x < 360, x \neq 180$   
R: all real y

(c)



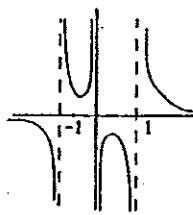
D: all real x  
R:  $y > 0$

(d)



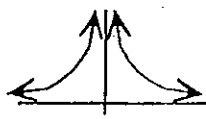
D:  $x \neq \pm 1$   
R:  $y \leq -2, y > 0$

(e)



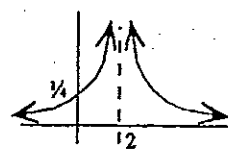
D:  $x \neq 0, \pm 1$   
R:  $y \neq 0$

(f)



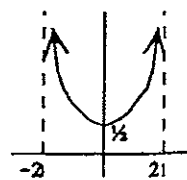
D:  $x \neq 0$   
R:  $y > 0$

(g)



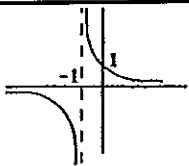
D:  $x \neq 2$   
R:  $y > 0$

(h)

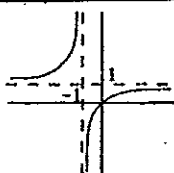


D:  $-2 < x < 2$   
R:  $y \geq \frac{1}{4}$

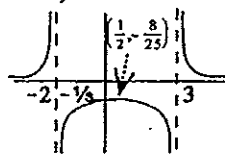
5. (a)



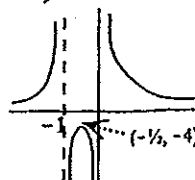
(b)



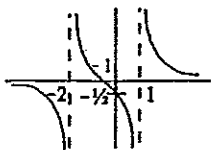
(c)



(d)



(e)



(f)

