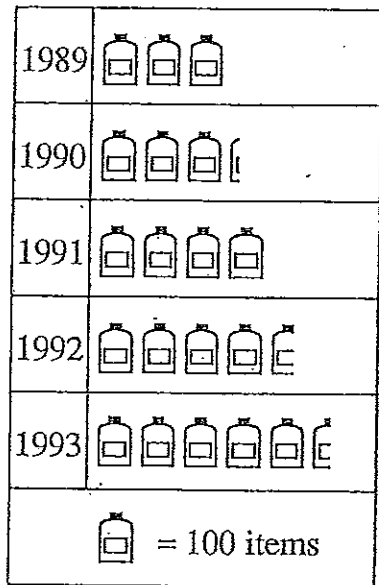


Note: Only turn back to page number if you have difficulty

Page

Q1. Riverview Pharmacy recorded their sales of sunscreen lotion over five consecutive summers from 1989 to 1993. The sales figures are represented by the graph below:

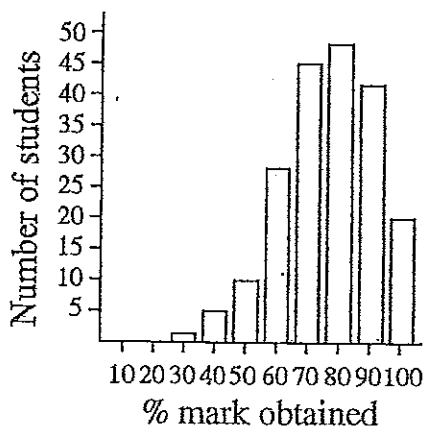
103



- How many items of sunscreen were sold during the summer of 1990?
- What was the increase in sales from 1990 to 1992?
- What were the combined sales of 1992 and 1993?
- How many items were sold over the 5 year period?
- What was the average number of items sold per year?
- Name a possible reason why sales are on the increase.

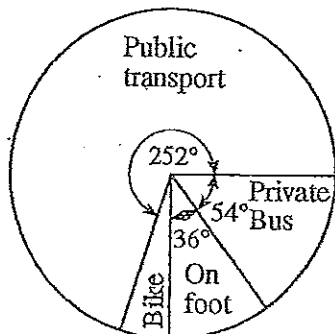
Q2. The column graph below shows the marks obtained by Hixson High Year 8 students in their annual spellathon:

104



- How many students scored higher than 90%?
- How many students scored 70%?
- How many students scored either 80 or 90%?
- If 50% was the passmark, how many students failed?
- How many students sat for the spellathon?

Q3.



There are 500 pupils in a school. The pie graph shows the means by which these pupils travel to school.

106

- How many pupils travel by public transport?
- How many travel by private bus?
- How many pupils either walk or ride a bike to school?

Level 1 — Graphs

- Q1. (a) 325 (b) 150 (c) 1025 (d) 2050 (e) 410
(f) The growing awareness of the damage caused by the sun and the risk of skin cancer.
- Q2. (a) 20 (b) 45 (c) 90 (d) 7 (e) 200
- Q3. (a) 350 (b) 75 (c) 75