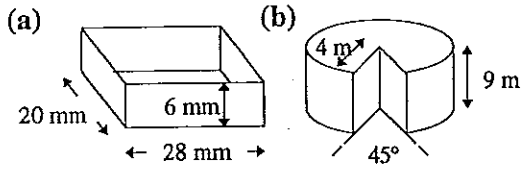


### Skill 7.7 Surface area of solids

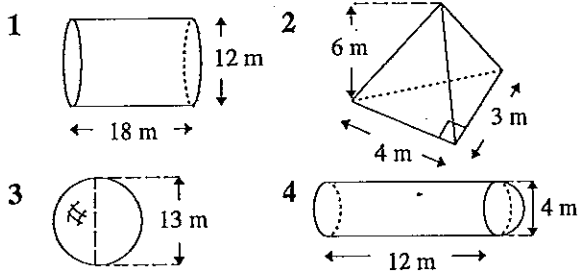
1 Find the surface area of these solids:



2 Find the total surface area of a sphere with radius of 83 cm.

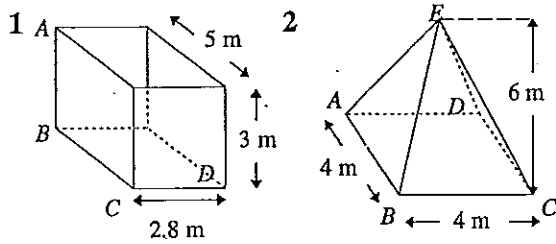
### Skill 7.8 Volume of solids

Find the volume of these solids:



### Skill 7.9 Working with solids

Find the length of the labelled sides:



(a)  $AC$  (b)  $BD$   
(c)  $AD$

(a)  $AC$  (b)  $EC$

**Skill 7.7**

- 1 (a)  $1136 \text{ mm}^2$  (b)  $357.88 \text{ m}^2$   
2  $86569.7 \text{ cm}^2$

**Skill 7.8**

- 1  $2035.8 \text{ m}^3$  2  $36 \text{ m}^3$  3  $1150.3 \text{ m}^3$   
4  $167.55 \text{ m}^3$

**Skill 7.9**

- 1 (a)  $5.83 \text{ m}$  (b)  $5.73 \text{ m}$  (c)  $6.47 \text{ m}$   
2 (a)  $5.66 \text{ m}$  (b)  $6.63 \text{ m}$