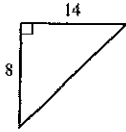


Pythagoras' theorem

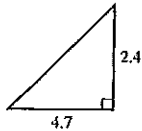
All Multiple Choice

1 What is the value of the hypotenuse?



- A 11
- B 16
- C 19
- D 22

2 What is the value of the longest side?



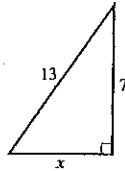
- A 2.1
- B 3.4
- C 4.9
- D 5.3

3 The diagonal of a rectangle is 100 m. One side has a length of 80 m. The length of the other side is:

- A 40 m
- B 50 m
- C 60 m
- D 70 m

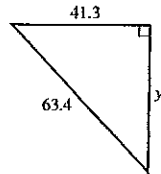
Name: _____

4 What is the value of the pronumeral?
Answer in exact form.



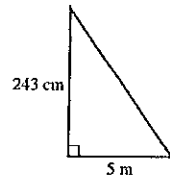
- A $\sqrt{218}$
- B $\sqrt{169}$
- C $\sqrt{120}$
- D $\sqrt{100}$

5 The value of the pronumeral is?



- A 10.8
- B 12.7
- C 33.5
- D 48.1

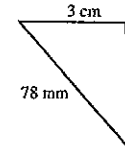
6



The length of the hypotenuse is closest to:

- A 556 cm
- B 589 cm
- C 610 cm
- D 734 cm

7 The length of the third side is:



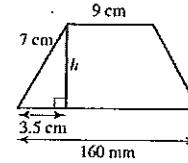
- A 61 mm
- B 72 mm
- C 78 mm
- D 83 mm

8 Jane drives 2.5 km north then 350 m east.

How far is she from her starting point (in km)?

- A 999 m
- B 1 km
- C 1.3 km
- D 2.52 km

Question 9 and 10 information



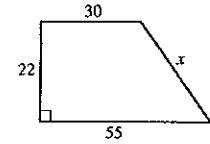
9 The opposite sides of a trapezium are 9 cm and 160 mm and the left slant height is 7 cm. The height, h , of the trapezium is?

- A 6 cm
- B 7 cm
- C 8 cm
- D 9 cm

10 The length of the right slanting side is:

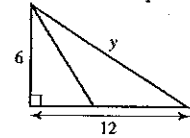
- A 6 cm
- B 7 cm
- C 8 cm
- D 9 cm

11 What is the value of the pronumeral x ?
Answer in exact form.



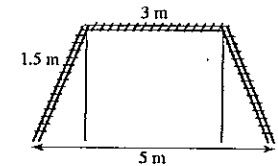
- A $\sqrt{3509}$
- B $\sqrt{1384}$
- C $\sqrt{1225}$
- D $\sqrt{1109}$

12 What is the value of the pronumeral y ?



- A 14.3
- B 13.4
- C 12.2
- D 11.5

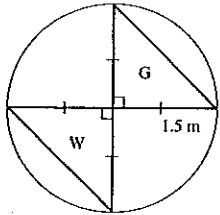
13 At a childrens' playground, the monkey bars are made up of 2 ladders connected by a 3-m-long horizontal ladder. The 2 ladders are 5 m apart and each ladder has sloping sides of 1.5 m as shown. The height of the horizontal ladder off the ground is:



- A 1.5 m
- B 1.4 m
- C 1.2 m
- D 1.1 m

- 14 Jane and Yvette go bushwalking. They walk 4.5 km south, 2.3 km west then 1.9 km north. The distance they are from the starting point is:
- A 1.2 km
 - B 1.9 km
 - C 2.8 km
 - D 3.5 km

- 15 Thang has a circular pond in her garden. She constructs 2 triangular wire meshes as shown, in one she puts goldfish (G) and in the other she puts water plants (W). The amount of wire mesh needed is:



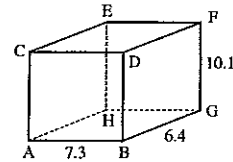
- A 9 m
 - B 10.2 m
 - C 15.3 m
 - D 33.6 m
- 16 The set of 3 numbers for the sides of a right-angled triangle is:
- A 6, 8, 10
 - B 2, 7, 9
 - C 11, 3, 15
 - D 14, 19, 22
- 17 Using the Pythagorean triad 3, 4, 5, another Pythagorean triad would be:
- A 6, 4, 10
 - B 36, 12, 50
 - C 9, 12, 15
 - D 12, 8, 10

Question 18 and 19 information

If the smallest number of a Pythagorean triad is 15:

- 18 The middle number is:
- A 110
 - B 111
 - C 112
 - D 113
- 19 The third number (the longest side) is:
- A 110
 - B 111
 - C 112
 - D 113
- 20 Using the value of $x = 5$ and $y = 8$ a Pythagorean triad would be:
- A 25, 13, 64
 - B 45, 25, 64
 - C 25, 40, 64
 - D 39, 80, 89

Question 21 and 22 information

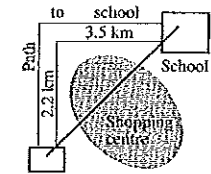


- 21 What is the distance BH in the figure?
- A 9.7
 - B 10.3
 - C 12.5
 - D 16.2
- 22 The distance BE is:
- A 11.3
 - B 12.4
 - C 13.3
 - D 14

- 23 Sita tries to put his 30-cm ruler in his pencil box. His box case measures 7 cm by 12 cm by 20 cm. The ruler is hanging out by:
- A 4 cm
 - B 5 cm
 - C 6 cm
 - D 7 cm

- 24 An ice-cream cone has a diameter of 5 cm. The sloping edge of the cone has a length of 9 cm. The height of the cone is:
- A $\sqrt{74.75}$
 - B $\sqrt{78}$
 - C $\sqrt{80.75}$
 - D $\sqrt{87.25}$

- 25 Shukla and Leo are walking to school. Shukla decides to take a short cut and walks diagonally through the shops while Leo walks along the path.



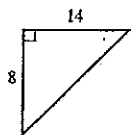
What is the difference between the 2 paths?

- A 1.6 km
- B 0.5 km
- C 0.4 km
- D 0.3 km

Pythagoras' theorem

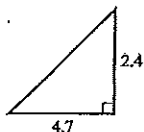
All Multiple Choice

1 What is the value of the hypotenuse?



- A 11
- B 16
- C 19
- D 22

2 What is the value of the longest side?



- A 2.1
- B 3.4
- C 4.9
- D 5.3

3 The diagonal of a rectangle is 100 m. One side has a length of 80 m. The length of the other side is:

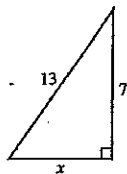
- A 40 m
- B 50 m
- C 60 m
- D 70 m

18/24

Good effort! See corrections!

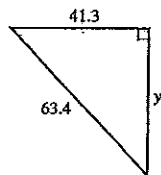
Name: Nancy Le

4 What is the value of the pronumeral? Answer in exact form.



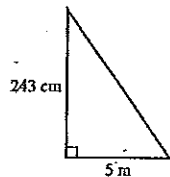
- A $\sqrt{218}$
- B $\sqrt{169}$
- C $\sqrt{120}$
- D $\sqrt{100}$

5 The value of the pronumeral is?



- A 10.8
- B 12.7
- C 33.5
- D 48.1

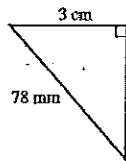
6



The length of the hypotenuse is closest to:

- A 556 cm
- B 589 cm
- C 610 cm
- D 734 cm

7 The length of the third side is:



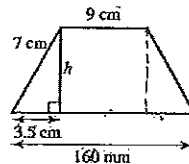
- A 61 mm
- B 72 mm
- C 78 mm
- D 83 mm

8 Jane drives 2.5 km north then 350 m east.

How far is she from her starting point (in km)?

- A 999 m
- B 1 km
- C 1.3 km
- D 2.52 km

Question 9 and 10 information



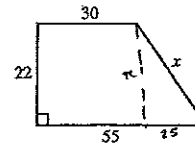
9 The opposite sides of a trapezium are 9 cm and 160 mm and the left slant height is 7 cm. The height, h , of the trapezium is?

- A 6 cm
- B 7 cm
- C 8 cm
- D 9 cm

10 The length of the right slanting side is:

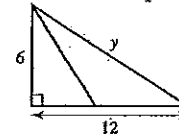
- A 6 cm
- B 7 cm
- C 8 cm
- D 9 cm

11 What is the value of the pronumeral x ? Answer in exact form.



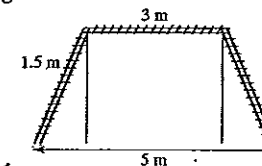
- A $\sqrt{3509}$
- B $\sqrt{1384}$
- C $\sqrt{1225}$
- D $\sqrt{1109}$

12 What is the value of the pronumeral y ?



- A 14.3
- B 13.4
- C 12.2
- D 11.5

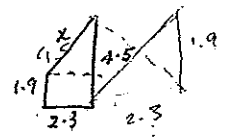
13 At a children's playground, the monkey bars are made up of 2 ladders connected by a 3-m-long horizontal ladder. The 2 ladders are 5 m apart and each ladder has sloping sides of 1.5 m as shown. The height of the horizontal ladder off the ground is:



- A 1.5 m
- B 1.4 m
- C 1.2 m
- D 1.1 m

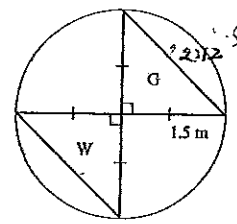
14. Jane and Yvette go bushwalking. They walk 4.5 km south, 2.3 km west then 1.9 km north. The distance they are from the starting point is:

- A 1.2 km
- B 1.9 km
- C 2.8 km
- D 3.5 km



15. Thang has a circular pond in her garden. She constructs 2 triangular wire meshes as shown, in one she puts goldfish (G) and in the other she puts water plants (W). The amount of wire mesh needed is:

- A 9 m
- B 10.2 m
- C 15.3 m
- D 33.6 m



16. The set of 3 numbers for the sides of a right-angled triangle is:

- A 6, 8, 10
- B 2, 7, 9
- C 11, 3, 15
- D 14, 19, 22

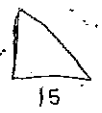
17. Using the Pythagorean triad 3, 4, 5, another Pythagorean triad would be:

- A 6, 4, 10
- B 36, 12, 50
- C 9, 12, 15
- D 12, 8, 10

Question 18 and 19 information
If the smallest number of a Pythagorean triad is 15:

18. The middle number is:

- A 110
- B 111
- C 112
- D 113



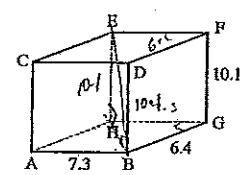
19. The third number (the longest side) is:

- A 110
- B 111
- C 112
- D 113

20. Using the value of $x = 5$ and $y = 8$ a Pythagorean triad would be:

- A 25, 13, 64
- B 45, 25, 64
- C 25, 40, 64
- D 39, 80, 89

Question 21 and 22 information



21. What is the distance BH in the figure?

- A 9.7
- B 10.3
- C 12.5
- D 16.2

22. The distance BE is:

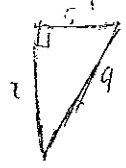
- A 11.3
- B 12.4
- C 13.3
- D 14

23. Sita tries to put his 30-cm ruler in his pencil box. His box case measures 7 cm by 12 cm by 20 cm. The ruler is hanging out by:

- A 4 cm
- B 5 cm
- C 6 cm
- D 7 cm

24. An ice-cream cone has a diameter of 5 cm. The sloping edge of the cone has a length of 9 cm. The height of the cone is:

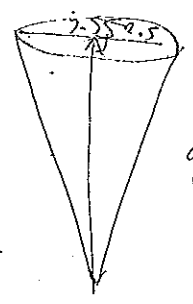
- A $\sqrt{74.75}$
- B $\sqrt{78}$
- C $\sqrt{80.75}$
- D $\sqrt{87.25}$



$$9^2 = 5^2 + x^2$$

$$81 - 25 = x^2 = 56$$

$$x = \sqrt{56}$$




$$9^2 = 7.5^2 + x^2$$

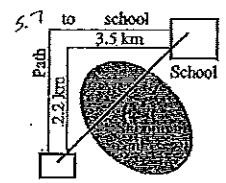
$$81 = 56.25 + x^2$$

$$x^2 = 24.75$$

$$x = \sqrt{24.75}$$



25. Shukla and Leo are walking to school. Shukla decides to take a short cut and walks diagonally through the shops while Leo walks along the path.



What is the difference between the 2 paths?

- A 1.6 km
- B 0.5 km
- C 0.4 km
- D 0.3 km

$$x^2 = 12^2 + 20^2$$

$$x = \sqrt{144 + 400}$$

$$= 25.5$$

$$y^2 = 7^2 + x^2$$

$$= 24.3$$

happens by $30 - y$